
GRAPHING LINES

□ INTRODUCTION

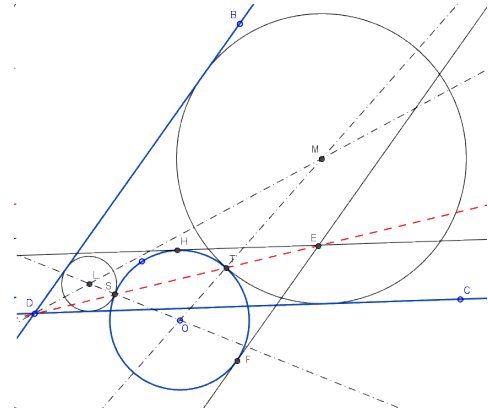
Consider the equation

$$y = 2x - 1$$

If we let $x = 10$, for instance, we can calculate the corresponding value of y :

$$y = 2(10) - 1 = 20 - 1 = 19$$

Thus, a solution of the equation is the pair $x = 10, y = 19$, which we can write as the ordered pair $(10, 19)$. Another solution to this equation is $(0, -1)$; in fact, there are an infinite number of solutions. Our goal now? Make a graph (a picture) of ALL the solutions of the equation.



□ GRAPHING A LINE

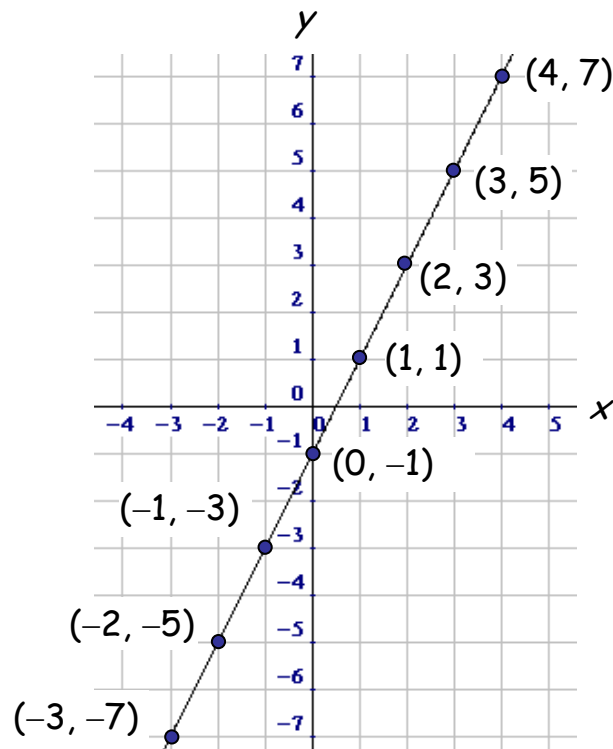
EXAMPLE 1: Graph the line $y = 2x - 1$.

Solution: The most important aspect of graphing is to learn where the x -values come from. They basically come from your head — you get to make them up. Certainly, later in this course and in future courses, this process will become more sophisticated, but for now just conjure them up from your imagination.

I'm going to choose x -values of $-3, -2, -1, 0, 1, 2, 3$, and 4 . For each of these x -values, I will calculate the corresponding y -value using the given formula, $y = 2x - 1$. Organizing all this information in a table is useful:

x	$y = 2x - 1$	(x, y)
-3	$2(-3) - 1 = -6 - 1 = -7$	$(-3, -7)$
-2	$2(-2) - 1 = -4 - 1 = -5$	$(-2, -5)$
-1	$2(-1) - 1 = -2 - 1 = -3$	$(-1, -3)$
0	$2(0) - 1 = 0 - 1 = -1$	$(0, -1)$
1	$2(1) - 1 = 2 - 1 = 1$	$(1, 1)$
2	$2(2) - 1 = 4 - 1 = 3$	$(2, 3)$
3	$2(3) - 1 = 6 - 1 = 5$	$(3, 5)$
4	$2(4) - 1 = 8 - 1 = 7$	$(4, 7)$

Now I will plot each of the eight points just calculated in 2-space, that is, on an x - y coordinate (Cartesian) system. Then the points will be connected with the most reasonable graph, in this case a straight line.



Notice that each (x, y) point is just one of the many solutions of the equation $y = 2x - 1$. Thus, each time we plot one of these points, we're plotting a solution of the equation. Also, whatever graph we get when we're done plotting all possible points is simply a picture of all of the solutions of the equation. So, in essence, we'll have a graph of the equation $y = 2x - 1$.

Notice that the graph passes through every quadrant except the second; also notice that as we move from left to right (that is, as the x 's grow larger) the graph rises (increases).

Final Comments on Example 1:

We could let $x = 1,000,000$ for this equation, in which case y would equal $2(1,000,000) - 1 = 1,999,999$. That is, the point $(1000000, 1999999)$ is on the line. Can we graph it? Not with the scale we've selected for our graph. But if we traveled along the line — up and up and up and way up — we would eventually run into the point $(1000000, 1999999)$.

We could also have used fractions like $2/7$ for x . This would have given us the point $(2/7, -3/7)$, which is in Quadrant IV. This point, too, is definitely on the line.

And we may even have used a number like π for x , in which case we would obtain the point $(\pi, 2\pi - 1)$. This point is impossible to plot precisely, but I guarantee that it's in the first quadrant (both coordinates are positive), and it's on the line we've drawn.

In short, every solution of the equation $y = 2x - 1$ is a point on the line, and every point on the line is a solution of the equation.

EXAMPLE 2: **Graph the line $y + x = 2$.**

Solution: The equation of the line will be easier to work with if we first solve for y by subtracting x from each side of the equation:

$$y = 2 - x$$

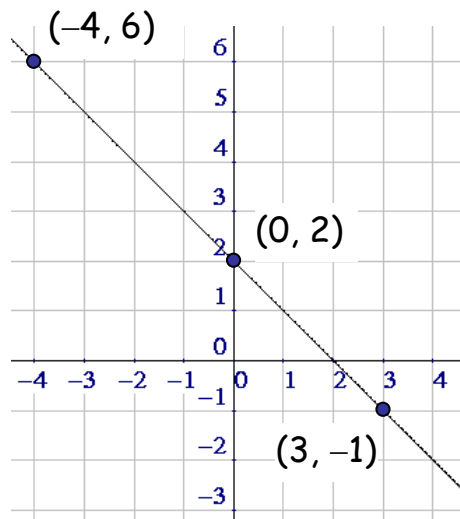
It's also better form (you'll see why later) if we put the $-x$ term right after the equal sign. The line is now

$$y = -x + 2$$

If $x = 0$, then $y = -0 + 2 = 2$. Thus, $(0, 2)$ is on the line.

If $x = 3$, then $y = -3 + 2 = -1$. So $(3, -1)$ is on the line.

If $x = -4$, then $y = -(-4) + 2 = 4 + 2 = 6$. Therefore, $(-4, 6)$ is on the line. If we plot these three points, and then connect them together, we get a graph like the following:



Notice that the graph passes through every quadrant except the third. Also note that as we move from left to right (that is, as the x 's grow larger) the graph falls (decreases).

Note: It's clear that two different points completely determine a line, and so some students plot exactly two points, connect them with a straight line, and they're done. Warning: You're taking a big gamble when you plot just two points.

If you make an error with either point, you'll get the wrong line, and there will be no way for you to

know that you've goofed. Even worse, what if the equation isn't even a line in the first place? Plotting just two points (even if they're both correct) will not suffice to graph a curve that is not a simple straight line (like a circle).

***The more points you plot,
the better!***

Homework

1.
 - a. Does the point $(3, 19)$ lie on the line $y = 6x + 1$?
 - b. Does the point $(-1, 5)$ lie on the line $y = -2x + 4$?
 - c. Does the point $(4, -3)$ lie on the line $2x + 5y = 3$?
 - d. Does the point $(-2, -4)$ lie on the line $x - 3y = 10$?

2. Graph each of the following lines:
 - a. $y = x$
 - b. $y = -x$
 - c. $y = 2x$
 - d. $y = -3x$
 - e. $y = 1.5x$
 - f. $y + 0.5x = 0$

3. Graph each of the following lines:
 - a. $y = x + 3$
 - b. $y = x - 2$
 - c. $y = -x + 1$
 - d. $y = 2x + 3$
 - e. $y = 3x - 4$
 - f. $y = -2x - 1$
 - g. $y + 2x = 1$
 - h. $y - x = 2$
 - i. $y - 2x + 1 = 0$
 - j. $y = 0.5x - 1$
 - k. $y = -1.5x - 2$
 - l. $y = -3x - 3$

Review Problems

4.
 - a. If $y = -7x + 10$, and if $x = 10$, then $y = \underline{\hspace{2cm}}$.
 - b. If $y = 13x$, and if $x = \pi$, then $y = \underline{\hspace{2cm}}$. (give the exact answer)
 - c. Describe the line $y = x$.
 - d. Describe the line $y = -x$.

5. Graph: $y = -3x - 1$

6

6. Sketch each line and determine the only quadrant that the line does not pass through:

a. $y = 2x + 7$

b. $y = 3x - 9$

c. $y = -2x + 7$

d. $y = -5x + 1$

e. $y = -x - 9$

f. $y = \pi x - \sqrt{2}$

7. Determine whether or not the graph of the given equation passes through the *origin* [the point $(0, 0)$].

a. $y = x + 1$

b. $y = x$

c. $y = x - 5$

d. $y = 7x$

e. $y = x^2$

f. $y = x^2 + 1$

g. $y = 7 - x$

h. $y = -x$

i. $y = x^3$

j. $y = \frac{x}{3}$

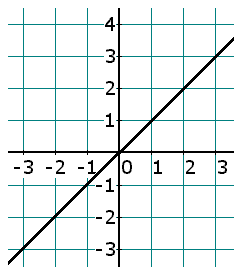
k. $y = \frac{x+1}{2}$

l. $y = 0.3x^2$

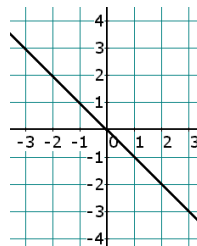
Solutions

1. a. Yes b. No c. No d. Yes

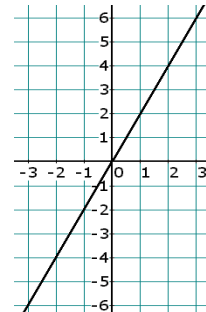
2. a.



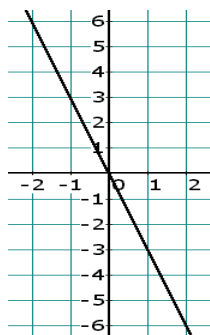
- b.



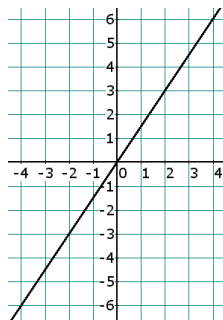
- c.



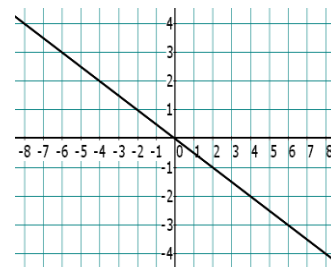
d.



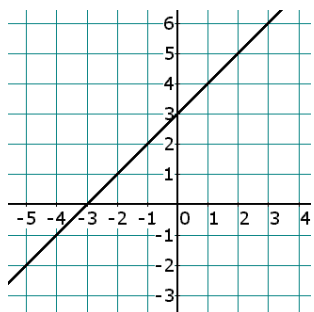
e.



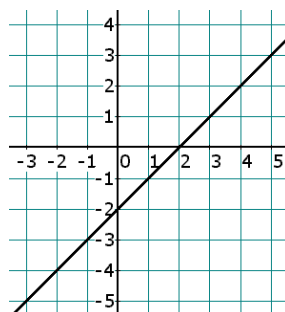
f.



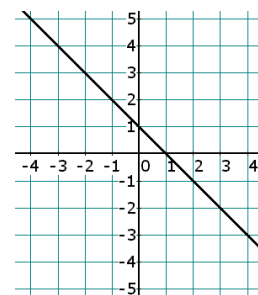
3. a.



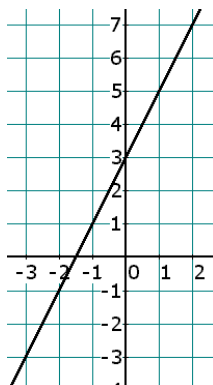
b.



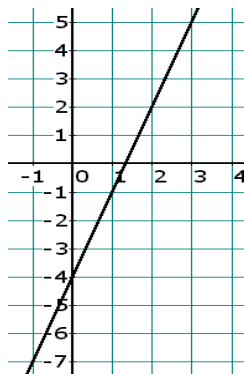
c.



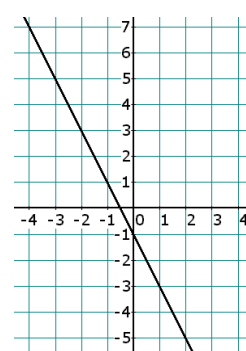
d.



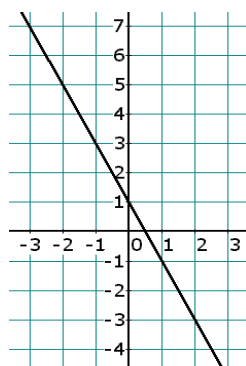
e.



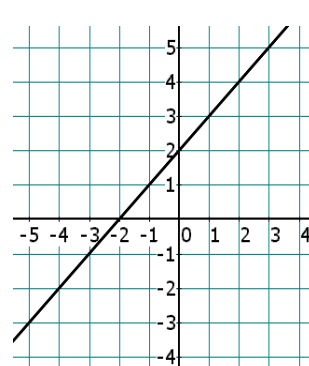
f.



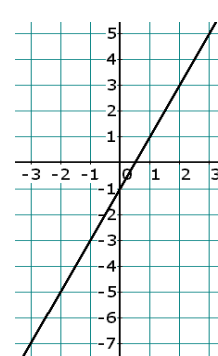
g.



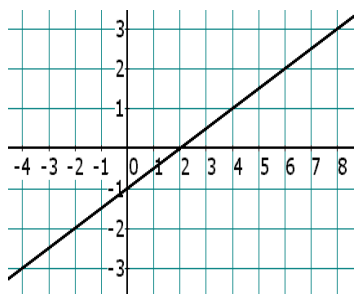
h.



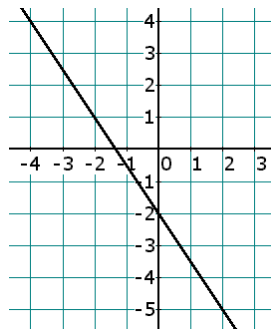
i.



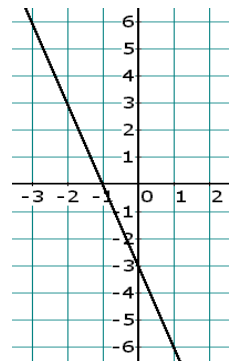
j.



k.

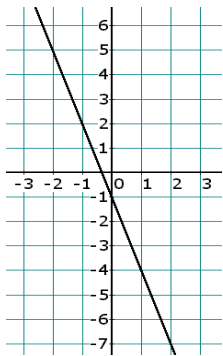


l.



4. a. -60
 b. 13π
 c. diagonal, thru the origin, going thru Quadrants I and III
 d. diagonal, thru the origin, going thru Quadrants II and IV

5.



6. a. IV b. II c. III d. III e. I f. II
7. a. No b. Yes c. No d. Yes e. Yes f. No
 g. No h. Yes i. Yes j. Yes k. No l. Yes

□ **TO ∞ AND BEYOND**

A. Graph: $y = x^2$

B. Graph: $x^2 + y^2 = 25$ Think 0's & 5's; then think 3's & 4's.

*“To the world,
you might be just one person,
but to one person,
you might just be the world.”*

– Theodore Geisel (Dr. Seuss)

